



# RAPHA EXAMINATIONS BOARD

[EMAIL:raphaexaminationsboard@gmail.com](mailto:raphaexaminationsboard@gmail.com)

*" Education is an Investment"*

END OF TERM ONE EXAMINATIONS 2025

## MIDDLE CLASS : LEARNING AREA 4

MY name is :.....

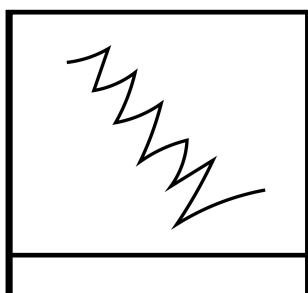
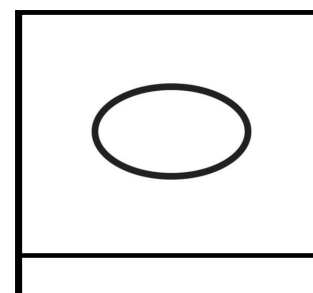
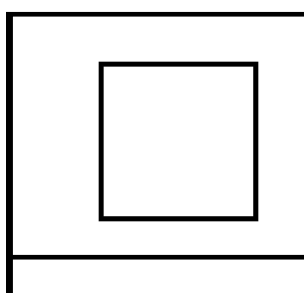
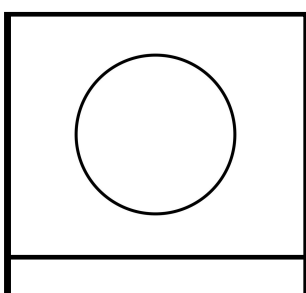

1. Count and circle the right number.

4	1	4
3	3	1
2	1	2
1	5	5
6	6	1

2. Write numbers in order.


7	10	9	8	6	5

3. Name these shapes.



oval, square, circle, star, zig zag

4. Count and write.



5. Match the same sets.

